


Name _____



Mixed Facts Practice



$$2 + 1 =$$

$$4 - 0 =$$

$$5 + 0 =$$

$$2 - 1 =$$

$$2 + 2 =$$

$$4 - 4 =$$

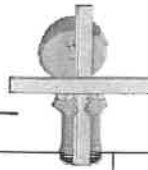
$$3 + 0 =$$

$$4 - 2 =$$

$$2 + 3 =$$

$$1 - 0 =$$

Name _____



Addition to Five Practice



$$2 + 1 =$$

$$\begin{array}{r} 2 \\ + 1 \\ \hline \end{array}$$

$$3 + 2 =$$

$$\begin{array}{r} 3 \\ + 2 \\ \hline \end{array}$$

$$4 + 0 =$$

$$\begin{array}{r} 4 \\ + 0 \\ \hline \end{array}$$

$$1 + 1 =$$

$$\begin{array}{r} 1 \\ + 1 \\ \hline \end{array}$$

$$0 + 5 =$$

$$\begin{array}{r} 0 \\ + 5 \\ \hline \end{array}$$

Name _____



Subtraction Practice



$$2 - 1 =$$

$$\begin{array}{r} 2 \\ - 1 \\ \hline \end{array}$$

$$3 - 2 =$$

$$\begin{array}{r} 3 \\ - 2 \\ \hline \end{array}$$

$$4 - 0 =$$

$$\begin{array}{r} 4 \\ - 0 \\ \hline \end{array}$$


$$1 - 1 =$$

$$\begin{array}{r} 1 \\ - 1 \\ \hline \end{array}$$

$$5 - 0 =$$

$$\begin{array}{r} 5 \\ - 0 \\ \hline \end{array}$$

Name _____




At the birthday party, Cam ate two cupcakes and Sam ate four cupcakes. How many cupcakes did they eat *all*? Show your thinking with pictures and a number sentence.

$$\underline{\quad} + \underline{\quad} = \underline{\quad}$$


Key

Name: _____


1 **Add:**






+



=




2 **How many?**

3 **Subtract:**

$9 - 1 =$




4 **TRACE** these numbers, then write them yourself.







11 11 eleven

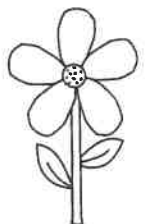
5 What are the missing **numbers**?

14, —, 16, —





6 Draw two circles.


					
1	2	3	4	5	6



Name: _____

1 **Add:**


 +  =



2 Draw 3 **triangles.**


3 Write the number ten.

4 **TRACE** these numbers, then write them yourself.









12 12 twelve

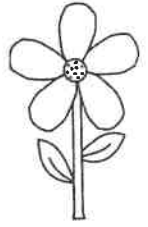
5 Circle the butterfly which is **the biggest?**



6 **Subtract:**

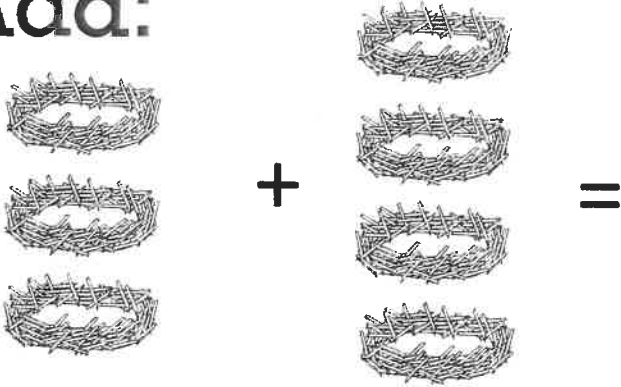
5 - 4 =

					
1	2	3	4	5	6



Name: _____


1 **Add:**




$3 + 3 =$

2 Write the number seven.

3 Is this a **square** or a **rectangle**?



4 What are the missing numbers?

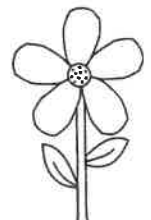


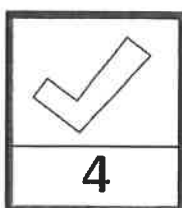
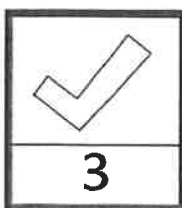

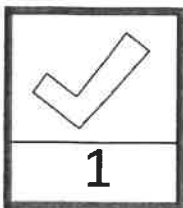



0, —, 2, —

5 **Trace** these numbers, then write them yourself.

13 13 thirteen

6 How many seed packets are there?

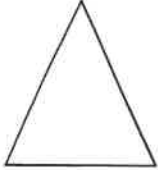


Name: _____

1 **Trace** these numbers, then write them yourself.


14 14 fourteen

2 Is this a **triangle** or a **diamond**?

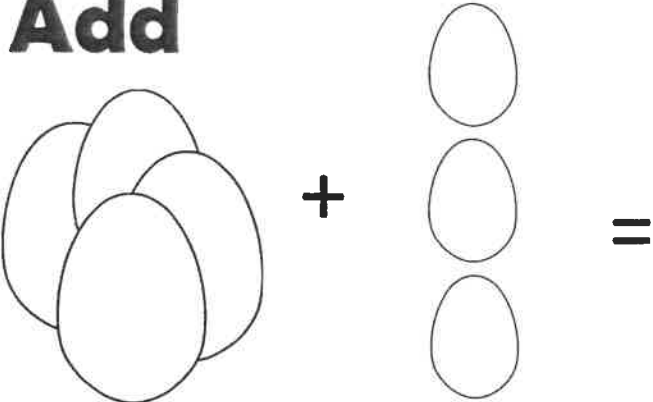


3 Draw a **circle**.

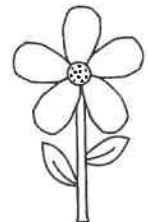
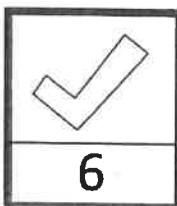
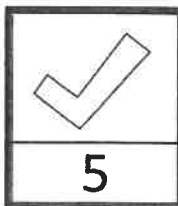
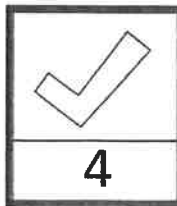
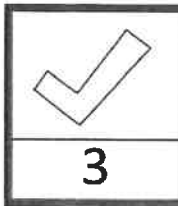
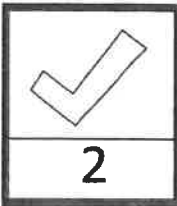

4 How many birds are there?



5 **Add**




6 Write the number **four**.




Name: _____

1 What are the missing numbers?
6, —, 8, —




2 Circle the smaller number:
8
2

3 Write this number in words.
4



4 TRACE these numbers, then write them yourself.
15 15 fifteen

5 Count FORWARD from 9.
9, □, □, □, □



6 Write the number three.

